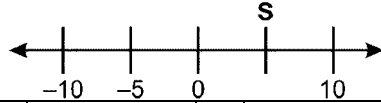


Time: 10 Minutes	Paper Math 6 (T-1)	Total Marks: 10
------------------	--------------------	-----------------

1st Month, 3rd Week, 5th Day	Unit # 1: Factors and Multiples
------------------------------	---------------------------------

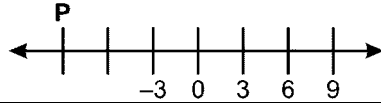
Q.1. Choose the correct options. ( $0.5 \times 6 = 3$ ) - درست جواب کا انتخاب کریں۔

(i) What is the value of "S" on number line. نمبر لائن پر "S" کی کیا قیمت ہے؟




(a) -5	(b) -10	(c) 5	(d) 0
--------	---------	-------	-------

(ii) What is the value of "P" on number line? نمبر لائن پر "P" کی کیا قیمت ہے؟



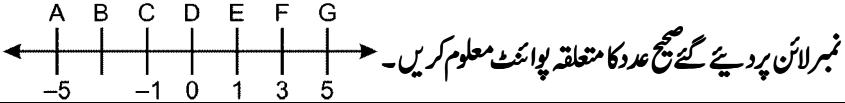
(a) -6	(b) -9	(c) 6	(d) 9
--------	--------	-------	-------

(iii) What are the values of W and U on number line respectively?



(a) 6, -18	(b) -6, -18	(c) -18, 6	(d) -18, -6
------------	-------------	------------	-------------

(iv) Identify the corresponding point to the integer on the number line.



(a) -5	(b) 5	(c) 3	(d) -3
--------	-------	-------	--------

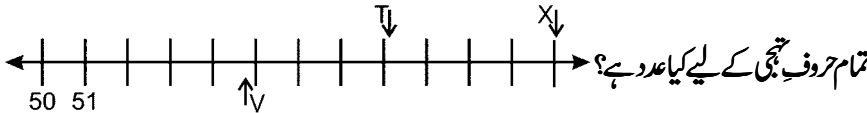
(v) What is the opposite integers of 89? 89 کا مخالف صحیح عدد کیا ہے؟

(a) 90	(b) -89	(c) -8.9	(d) +79
--------	---------	----------	---------

(vi) What is the opposite integers of -53? -53 کا مخالف صحیح عدد کیا ہے؟

(a) -53	(b) +50	(c) +53	(d) -51
---------	---------	---------	---------

Q.2. On what number do all the alphabet stands for? ( $1 \times 2 = 2$ )



Q.3. Write the opposite for the following integers. ( $1 \times 2 = 2$ )

(i) -92 (ii) 430 (iii) 0 (iv) -93  
درج ذیل صحیح عدد کے مخالف عدد لکھیں۔

Q.4. Draw number line and represent the following points on it.

( $1 \times 3 = 3$ ) - نمبر لائن بنائیں اور درج ذیل نقاط اس پر ظاہر کریں۔

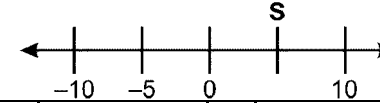
(i) 0, -8, 6, 3, -11 and -13 (ii) 3, 8, 5, -11, -5 and -7

Time: 10 Minutes	Paper Math 6 (T-1)	Total Marks: 10
------------------	--------------------	-----------------

1st Month, 3rd Week, 5th Day	Unit # 1: Factors and Multiples
------------------------------	---------------------------------

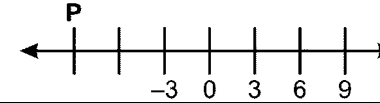
Q.1. Choose the correct options. ( $0.5 \times 6 = 3$ ) - درست جواب کا انتخاب کریں۔

(i) What is the value of "S" on number line. نمبر لائن پر "S" کی کیا قیمت ہے؟




(a) -5	(b) -10	(c) 5	(d) 0
--------	---------	-------	-------

(ii) What is the value of "P" on number line? نمبر لائن پر "P" کی کیا قیمت ہے؟



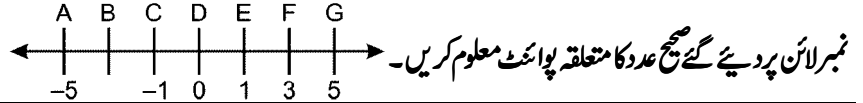
(a) -6	(b) -9	(c) 6	(d) 9
--------	--------	-------	-------

(iii) What are the values of W and U on number line respectively?



(a) 6, -18	(b) -6, -18	(c) -18, 6	(d) -18, -6
------------	-------------	------------	-------------

(iv) Identify the corresponding point to the integer on the number line.



(a) -5	(b) 5	(c) 3	(d) -3
--------	-------	-------	--------

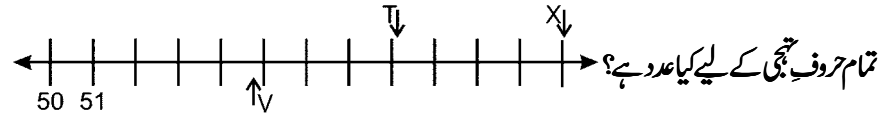
(v) What is the opposite integers of 89? 89 کا مخالف صحیح عدد کیا ہے؟

(a) 90	(b) -89	(c) -8.9	(d) +79
--------	---------	----------	---------

(vi) What is the opposite integers of -53? -53 کا مخالف صحیح عدد کیا ہے؟

(a) -53	(b) +50	(c) +53	(d) -51
---------	---------	---------	---------

Q.2. On what number do all the alphabet stands for? ( $1 \times 2 = 2$ )



Q.3. Write the opposite for the following integers. ( $1 \times 2 = 2$ )

(i) -92 (ii) 430 (iii) 0 (iv) -93  
درج ذیل صحیح عدد کے مخالف عدد لکھیں۔

Q.4. Draw number line and represent the following points on it.

( $1 \times 3 = 3$ ) - نمبر لائن بنائیں اور درج ذیل نقاط اس پر ظاہر کریں۔

(i) 0, -8, 6, 3, -11 and -13 (ii) 3, 8, 5, -11, -5 and -7